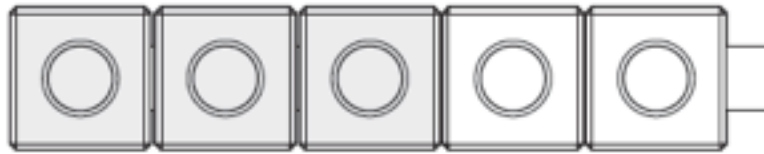


应用题：用物体

1

B



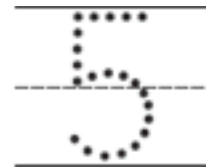
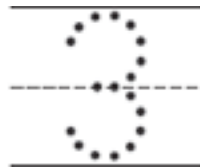
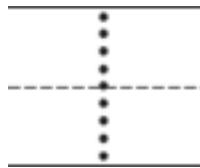
R



G



3
1
5

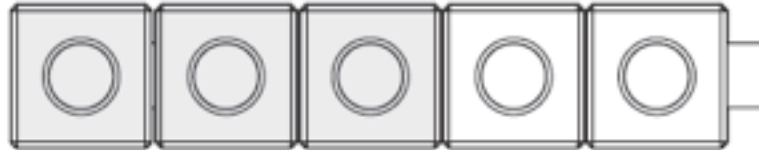


2

Y




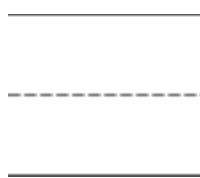
R



B



2
3
1



Directions Have children listen to each story and write the numbers in order below. **1** *Shea has 3 blue tiles, 1 red tile, and 5 green tiles. Which group has the fewest? Draw a box around the number that tells which group has the fewest.* **2** *Mollie has 2 yellow marbles, 3 red marbles, and 1 blue marble. Which group has the most? Circle the number that tells which group has the most.*