


用加到18的答案来做减法

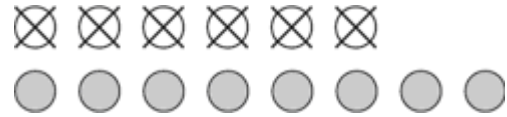
加法的答案可以找到减法的答案。
用图片来找到答案。

加法的答案




想一想, $6 + \underline{8} = 14$.

减法的答案



所以, $14 - 6 = \underline{8}$


用加法来帮助减法。



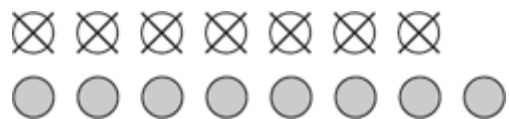
想一想, $9 + \underline{\quad} = 13$.




所以, $13 - 9 = \underline{\quad}$.



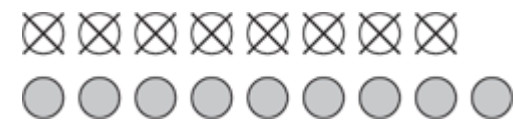
想一想, $7 + \underline{\quad} = 15$.



所以, $15 - 7 = \underline{\quad}$.



想一想, $8 + \underline{\quad} = 17$.



所以, $17 - 8 = \underline{\quad}$.

4. 代数。用相关的加法算式来找出减法的答案。

$11 - \underline{\quad} = 2$

$2 + \underline{\quad} = 11$

