

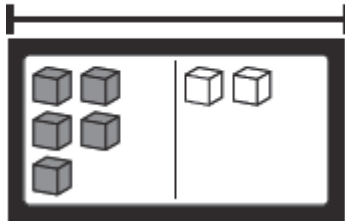
名字 _____

练习
2-10

把正确的算式圈起来。把错误的算式画一条线。
再写一个正确的减法算式。

1.

7



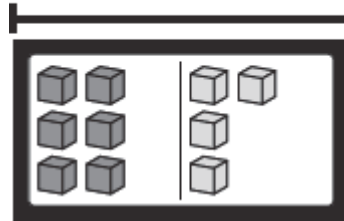
$5 = 2 - 7$

$2 = 7 - 5$

_____ - _____ = _____

2.

10



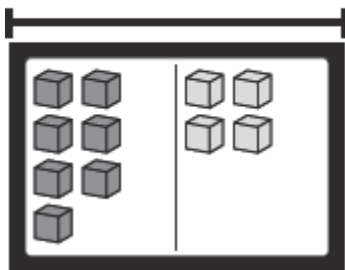
$4 = 10 - 6$

$4 - 6 = 10$

_____ = _____ - _____

3.

11



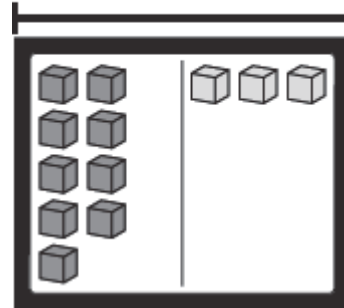
$11 = 4 - 7$

$7 = 11 - 4$

_____ - _____ = _____

4.

12



$9 = 12 - 3$

$9 - 12 = 3$

_____ = _____ - _____

5. 数字概念。把正确的算式圈起来

$4 - 3 = 5 - 1$

$8 - 4 = 9 - 5$

