


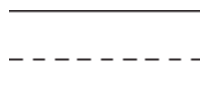

数字1到10的组合和图形

写出对的数字。


1.



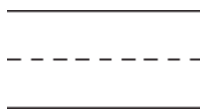

2.



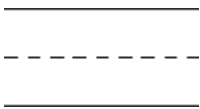

3.



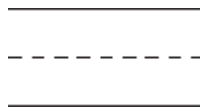

4.



5.



6.



数字概念

7. 大卫可以把7个圆形平分给2面旗子吗?

可以 不可以

