






排列组合

写加法算式


1. 

 +  = 


_____ + _____ = _____

2. 

_____ + _____ + _____ = _____


3. 

_____ + _____ = _____

4. 

_____ + _____ + _____ = _____

5. 妈妈烤饼干。
一共有4行，5列的饼干。
哪一个算式可以算出全部的饼干？



4 + 4 + 4 + 4

(A)

4 + 4 + 4 + 4 + 4

(B)


5 + 5 + 5 + 5

(C)

5 + 5 + 5 + 5 + 5

(D)

6. 想一想。 画出 2 行，4 列的排列组合， 然后写出算式。



_____ + _____ = _____