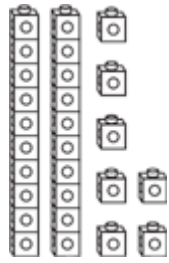



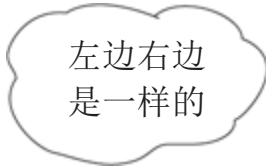
数字不同的组合



27

 2 个 10 7 个 1

$27 = \underline{20} + \underline{7}$



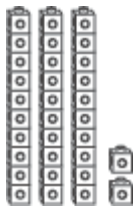
27

1个 10 17个 1

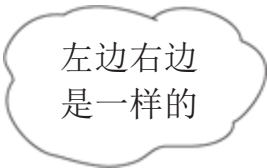
$27 = \underline{10} + \underline{17}$

用位值方块表示不同的数字。画出个位有几个方块。

1.



32



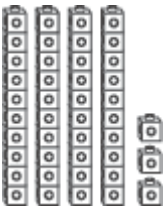
 3 个 10 2 个 1

 2 个 10 12 个 1

$32 = \underline{30} + \underline{2}$

$32 = \underline{20} + \underline{12}$

2.



 个 10 个 1

 个 10 个 1

$43 = \underline{\quad\quad} + \underline{\quad\quad}$

$43 = \underline{\quad\quad} + \underline{\quad\quad}$