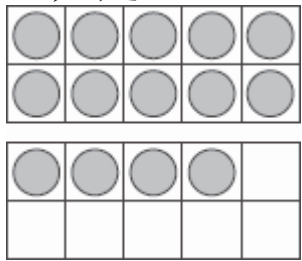


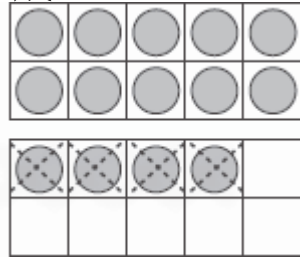
# 得到10再减

得到 10 可以帮你完成减法。  
做减法  $14 - 6$ 。

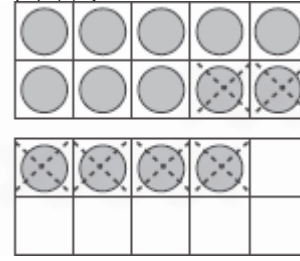
一共是 14



减 4



再减 2



一共减去6。

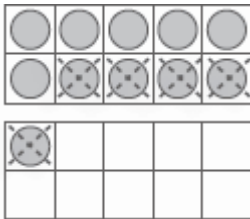
还剩 10

还剩 8

$$14 - 6 = \underline{8}$$

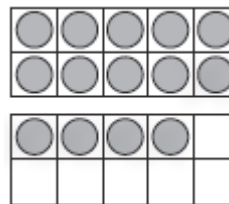
划掉圆片得到10 再减。  
完成减法算式。

1.



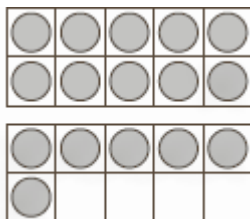
$11 - 5 = \underline{6}$

2.



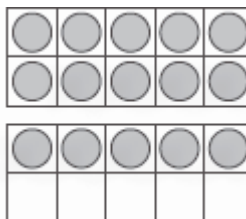
$14 - 5 = \underline{\quad}$

3.



$16 - 7 = \underline{\quad}$

4.



$15 - 9 = \underline{\quad}$