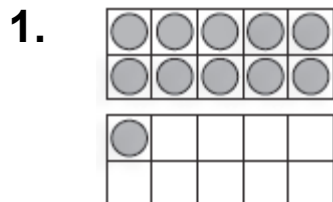
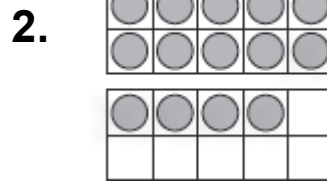


得到 10 再减

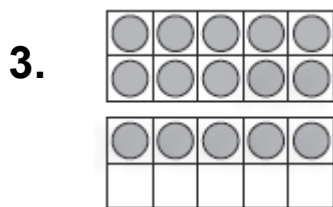
得到 10 再减
完成减法算式。



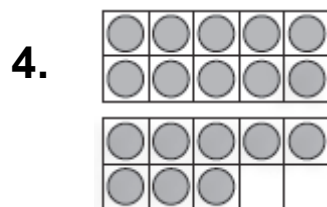
$$11 - 8 = \underline{\quad}$$



$$14 - 5 = \underline{\quad}$$



$$15 - 7 = \underline{\quad}$$



$$18 - 9 = \underline{\quad}$$

想一想

5. 这幅图表示的是哪个算式？

- Ⓐ $17 - 8 = 9$
- Ⓑ $16 - 10 = 6$
- Ⓒ $16 - 9 = 7$
- Ⓓ $16 - 8 = 8$

