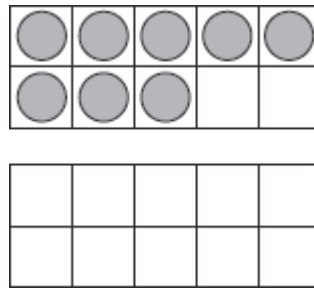


用十方格先找到十的加法

画图找出答案。找出未知数。

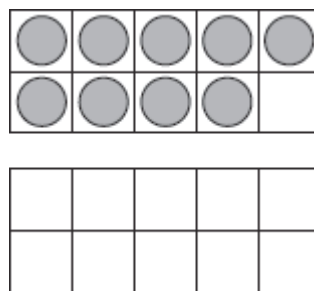
1. 8 10

$$\begin{array}{r} + 3 \\ \hline \square \end{array} \quad \longrightarrow \quad \begin{array}{r} + \square \\ \hline \square \end{array}$$



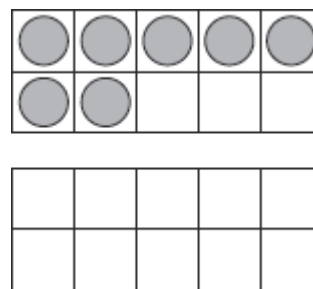
2. 9 10

$$\begin{array}{r} + 3 \\ \hline \square \end{array} \quad \longrightarrow \quad \begin{array}{r} + \square \\ \hline \square \end{array}$$



3. 7 10

$$\begin{array}{r} + 4 \\ \hline \square \end{array} \quad \longrightarrow \quad \begin{array}{r} + \square \\ \hline \square \end{array}$$



日记

4. 画8朵紫色的花，画4朵红色的花。

画10个红色的正方形，画2个紫色的正方形。

写出2个加法算式。

_____ + _____ = _____ _____ + _____ = _____