


5 还有 10 方格

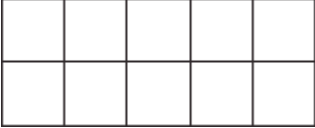
用10方格来学习5。
看加法算式，然后在10方格画图。



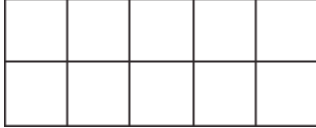
$$5 + 1 = 6$$

$$\begin{array}{r} \boxed{5} \\ + \boxed{1} \\ \hline 6 \end{array}$$


画图来找出加法里的未知数。

1.  $\begin{array}{r} \boxed{} \\ + \boxed{} \\ \hline \boxed{7} \end{array}$

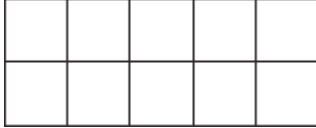
$5 + 2 = \underline{}$

2.  $\begin{array}{r} \boxed{} \\ + \boxed{5} \\ \hline \boxed{} \end{array}$

$4 + 5 = \underline{}$

3.  $\begin{array}{r} \boxed{3} \\ + \boxed{} \\ \hline \boxed{} \end{array}$

$3 + 5 = \underline{}$

4.  $\begin{array}{r} \boxed{} \\ + \boxed{0} \\ \hline \boxed{} \end{array}$

$5 + 0 = \underline{}$

数字概念

5. 小牛有5个灰色的圆形，要加几个小牛才会有10个圆形？

10

(A)

9

(B)

6

(C)

5

(D)