

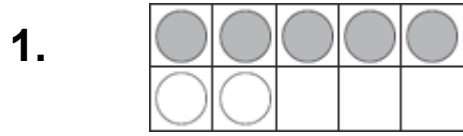
名字 \_\_\_\_\_

# 5 还有 10 方格

用10方格

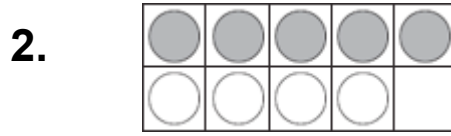
写一个有5的加法算式。

再写一个加起来等于10的算式。



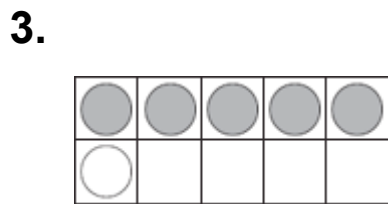
$$5 + \underline{2} = \underline{7}$$

$$\underline{7} + \underline{\quad} = 10$$



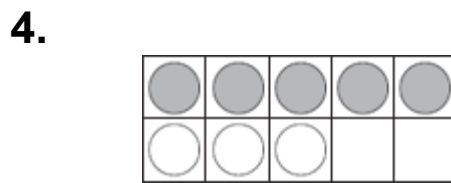
$$5 + \underline{\quad} = \underline{\quad}$$

$$\underline{\quad} + \underline{\quad} = 10$$



$$5 + \underline{\quad} = \underline{\quad}$$

$$\underline{\quad} + \underline{\quad} = 10$$



$$5 + \underline{\quad} = \underline{\quad}$$

$$\underline{\quad} + \underline{\quad} = 10$$

## 代数

5.  $15 + 2 = 17$

$$17 + \underline{\quad} = 20$$

(A) 2

(B) 3

(C) 5

(D) 17

6.  $15 + 4 = 19$

$$19 + \underline{\quad} = 20$$

(A) 15

(B) 4

(C) 2

(D) 1

