

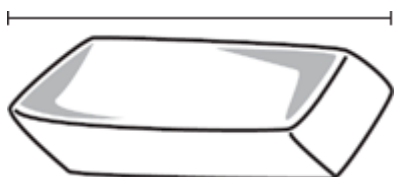
估计长度

估计长度。用方块来量一量真正的长度。

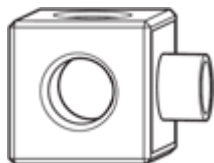
估计

测量

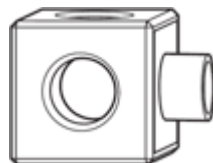
1.



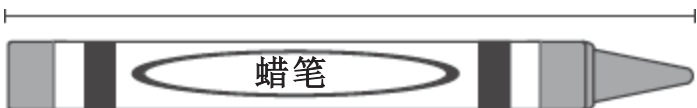
大概 _____



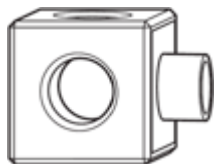
有 _____



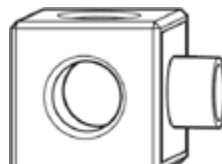
2.



大概 _____



有 _____



想一想

3. 这个钉书机的长大概有几个方块?

- (A) 6
- (B) 7
- (C) 14
- (D) 17

