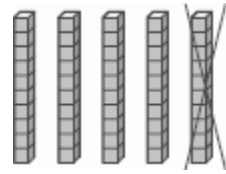


整10的减法

找出答案

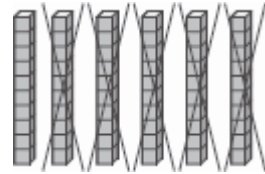
1. _____ 个10 - _____ 个10 = _____ 个10

_____ - _____ = _____



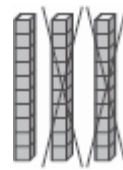
2. _____ 个10 - _____ 个10 = _____ 个10

_____ - _____ = _____



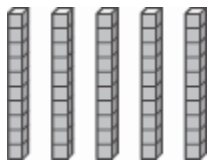
3. _____ 个10 - _____ 个10 = _____ 个10

_____ - _____ = _____



代数

4. 按照算式画掉几个10。把算式写完。



5 个 10 - _____ 个 10 = 3 个 10

50 - _____ = 30