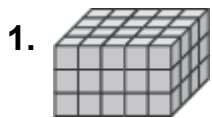



姓名 \_\_\_\_\_

# 模型与体积


找出每个长方体里有几个方块。你可以用单位方块或看图数有几个方块。



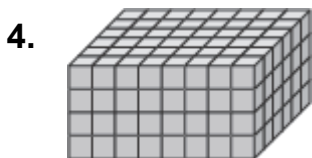
\_\_\_\_\_




\_\_\_\_\_



\_\_\_\_\_



\_\_\_\_\_



\_\_\_\_\_



\_\_\_\_\_

7. 在下面，画一个5个方块长  $\times$  4个方块宽  $\times$  2个方块高的长方体。

8. 做一个3个单位长  $\times$  2个单位宽  $\times$  4个单位高的长方体需要几个方块？

A 48

B 24

C 12

D 6

9. 你可以怎么用模型来找出长方体的体积？

---

---

---

---

---

---

---

