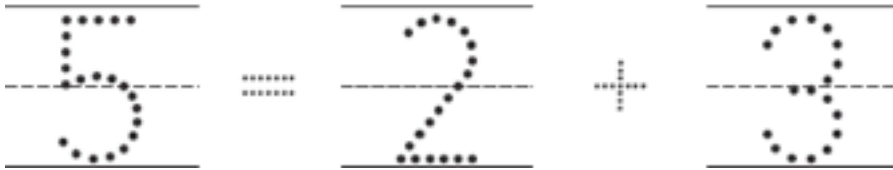
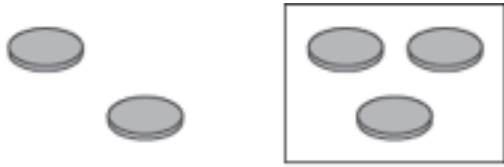
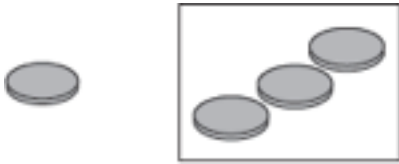


# 写出4和5的算式

1



2



3



**Directions** Have children: count the total number of counters and the number of counters in each set. Then trace the numbers and symbols to write the number sentence. count the total number of counters and then the parts that are inside and outside the box. Write a number sentence that describes the relationship between the whole and the parts.