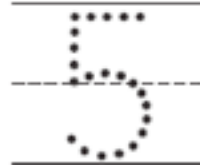
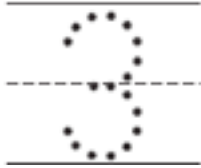
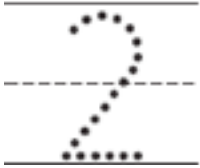
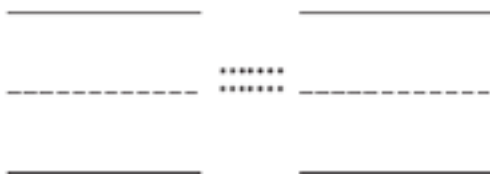



# 应用题：画个图

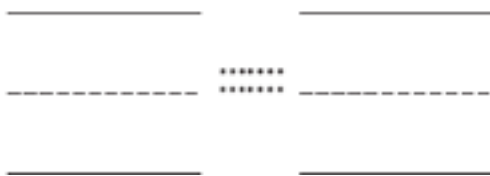


1



2



3



**Directions** Listen to each story. Draw circles to show the foods. Write the number in each group and the number in all.   
 ☆ Juanita buys 2 oranges at a fruit stand and 3 more at a supermarket. How many oranges does she buy in all?   
 ⚙ Brian eats 6 crackers. His baby brother eats 2. How many crackers do the boys eat in all?   
 🍇 There is a plate of 5 red grapes and a plate of 4 green grapes. How many grapes in all?