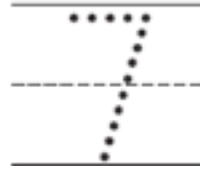
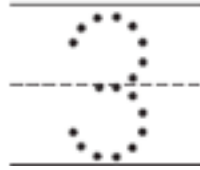
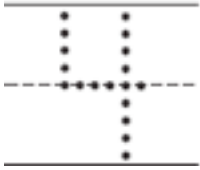


姓名 _____

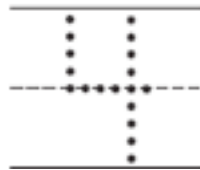
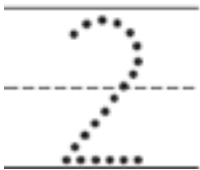
复习
7-6

加法算式

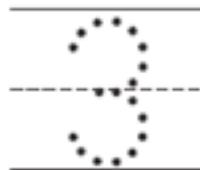
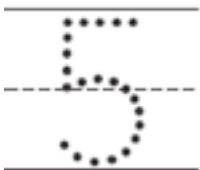
1



2



3



Directions Have children trace the numbers to tell how many there are in each group, show with counters, and join the groups. Then have them trace the plus sign and equal sign and write the sum.