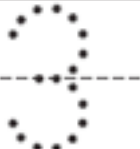

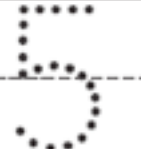


合起来 (二)






 和  是  .



 和 _____ 是 _____ .



_____ 和 _____ 是 _____ .

Directions Have children use counters to show each group as you tell a number story. Then have them trace or write numbers to record the number story and circle the counters to find how many in all.  Reese shows 3 counters. He shows 2 more counters. How many counters does he show in all?  Alisha shows 4 counters. She shows 1 more counter. How many does she show in all?  Claire shows 2 counters. She shows 4 more counters. How many counters does she show in all?