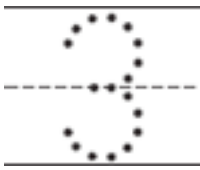
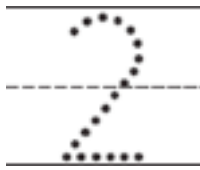


合起来的故事

1



和

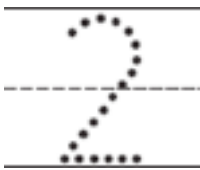


是

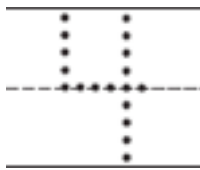


.

2



和



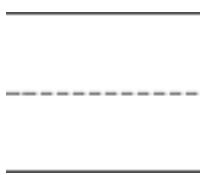
是

.

3



和



是

.

Directions Have children: 1-2 use cubes to show each story and then trace the number sentence that tells the story. Ryan has 3 cubes. Then he takes 2 more cubes. How many cubes are there in all? Alica has 2 cubes. Then she takes 4 more. How many cubes are there in all? 3 create a story about cubes, draw the cubes, and write the number sentence that tells the story.