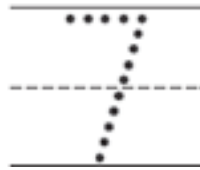



# 应用题：用物体

1



2

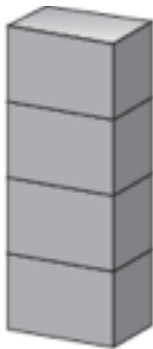


\_\_\_\_\_

-----

\_\_\_\_\_

3




\_\_\_\_\_

-----

\_\_\_\_\_

4



\_\_\_\_\_

-----

\_\_\_\_\_

**Directions** One child builds a tower. Her partner adds 1 more block to the tower. How many blocks now make up the tower? How can we find out? Have children: 1 - 2 add a counter (to represent a block) to each tower, count the total and write the number to show 1 more; 3 - 4 use counters to show 2 more and write the number.