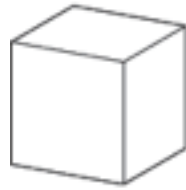
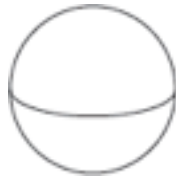


应用题：用逻辑推理

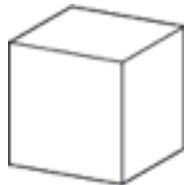
1



2







3



4



Directions Read the clues to children. Have them circle the shape that the clues describe.  I can slide and roll. Which shape am I?  I can roll but **cannot** stack. Which shape am I?  I can stack and slide. Which shape am I?  I have only 1 flat surface. Which shape am I?