

应用题：比手划脚

1

(A)



(B)



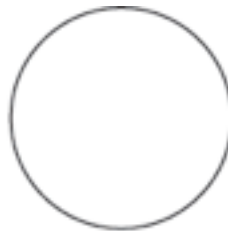

(C)



(D)



2



(A)



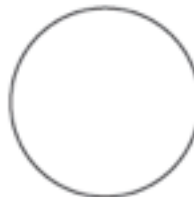
(C)



(B)



(D)



Directions Have children mark the best answer. 🏠 Which picture shows the cow next to the barn? 🍏 Which shape is to the right of the circle?