

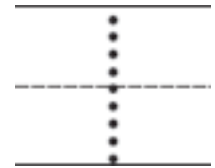
姓名 _____

复习
12-4



应用题：试一试，检查和修正




1




2



3



4



Directions Jared is using paper strips for a project. He tries to order the paper strips from shortest to longest. How can we check his work? Provide children with paper strips that measure 2 inches, 3 inches, 4 inches, and 5 inches. Have children compare and order the paper strips from shortest to longest and then write the numbers to show the correct order from shortest to longest (1–4).