



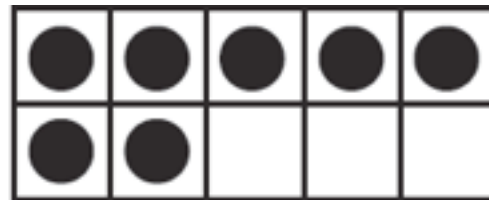

### 应用题：找出序列



$$15 = \underline{\quad\quad} + \underline{\quad\quad}$$



$$19 = \underline{\quad\quad} + \underline{\quad\quad}$$



$$\underline{\quad\quad} = \underline{\quad\quad} + \underline{\quad\quad}$$

**Directions** Have children: ★ draw 15 counters as one ten, or ten ones, and some additional ones and then complete the number sentence; ② draw 19 counters as one ten, or ten ones, and some additional ones and then complete the number sentence; ③ look at the counters and write a number sentence to match the picture.