


# 11, 12 和 13 的部分


1



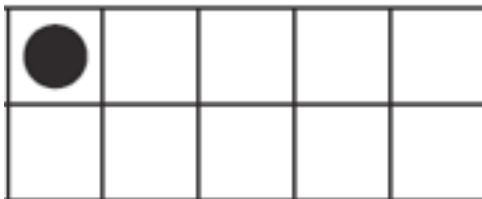
$$12 = 10 + 2$$




2



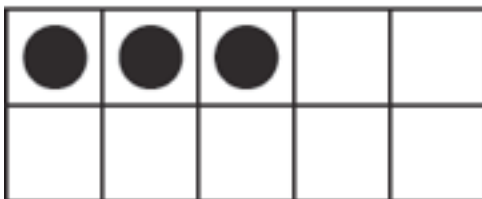
$$11 = 10 + \underline{\quad}$$



3



$$13 = \underline{\quad} + \underline{\quad}$$



**Directions** Have children look at the groups of ten-frames and complete the number sentences.