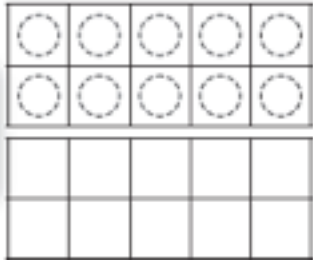


11 到 19 的组合



10 _____

13



10

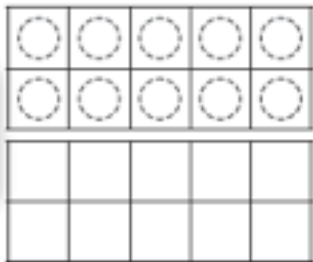
和

是

2

10 _____

16



10


和

是

3

10 _____

11



10

和

是

Directions Have children draw counters in the double ten-frame to show the number on each number card. Then have them show the number by counting on from 10 and then by adding a number to 10.