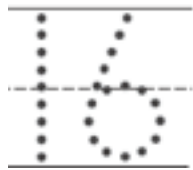


姓名 _____

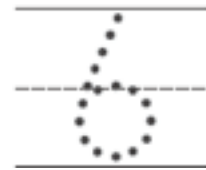
复习
10-4

应用题：找出序列

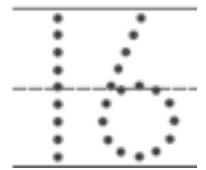
| | | | | | | | | | |
|----|----|----|----|----|---|----|----|----|----|
| 1 | 2 | 3 | 4 | 5 | 6 | 7 | 8 | 9 | 10 |
| 11 | 12 | 13 | 14 | 15 | ? | 17 | 18 | 19 | 20 |



是6又多10。 10 +



=



| | | | | | | | | | |
|----|----|---|----|----|----|----|----|----|----|
| 1 | 2 | 3 | 4 | 5 | 6 | 7 | 8 | 9 | 10 |
| 11 | 12 | ? | 14 | 15 | 16 | 17 | 18 | 19 | 20 |



是3又多10。 10 +



Directions Have children find the missing number in the second row of the hundred chart and complete the sentence and number sentence to show the relationship between the two outlined numbers.