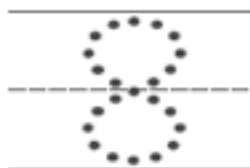
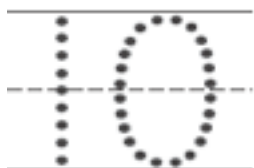


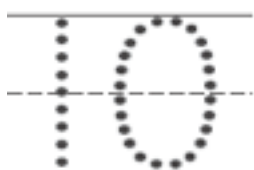
姓名 _____

复习
10-3

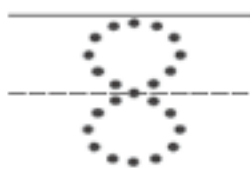
凑成 17, 18 和 19



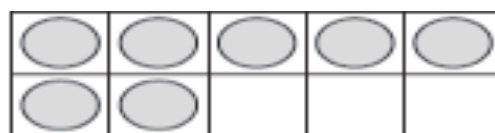
一共 18



+



=



一共 17



+



=



Directions Have children tell how many are in each ten-frame, then tell how many in all, and finally write the number sentence that goes with the picture.