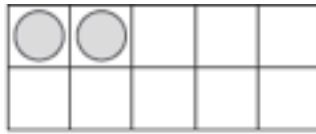
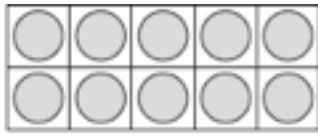


姓名 _____


复习
10-1

凑成 11, 12 和 13




$$\begin{array}{c} \text{_____} \\ \text{-----} \\ \text{_____} \end{array} + \begin{array}{c} \text{_____} \\ \text{-----} \\ \text{_____} \end{array} 2 = \begin{array}{c} \text{_____} \\ \text{-----} \\ \text{_____} \end{array} 12$$

1



$$\begin{array}{c} \text{_____} \\ \text{-----} \\ \text{_____} \end{array} 10 + \begin{array}{c} \text{_____} \\ \text{-----} \\ \text{_____} \end{array} = \begin{array}{c} \text{_____} \\ \text{-----} \\ \text{_____} \end{array}$$

2



$$\begin{array}{c} \text{_____} \\ \text{-----} \\ \text{_____} \end{array} + \begin{array}{c} \text{_____} \\ \text{-----} \\ \text{_____} \end{array} = \begin{array}{c} \text{_____} \\ \text{-----} \\ \text{_____} \end{array}$$

Directions Have children complete the drawings and number sentences to make 11 and then 13.